

Name _____

Period _____

Geography and Sourcing

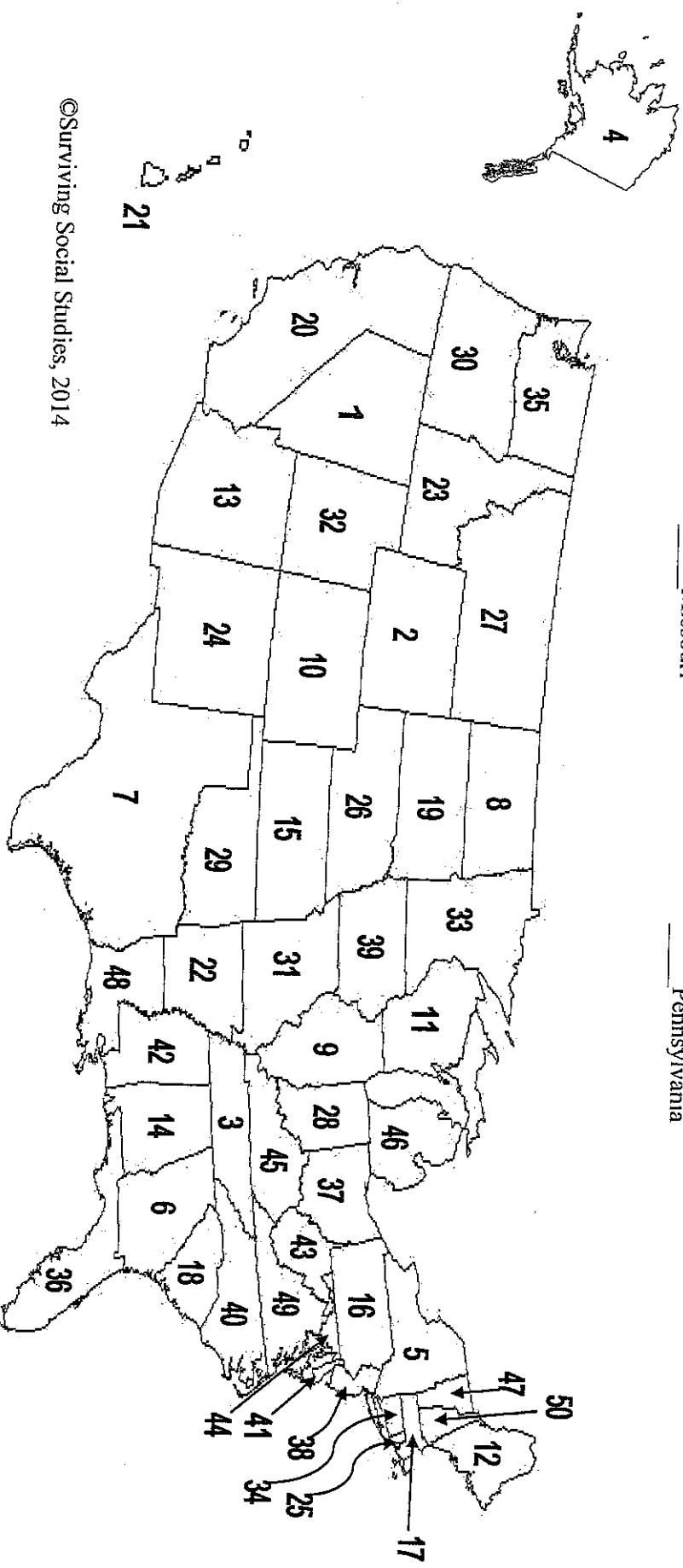
The 50 States


- Alabama
- Alaska
- Arizona
- Arkansas
- California
- Colorado
- Connecticut
- Delaware
- Florida
- Georgia
- Hawaii
- Idaho

- Illinois
- Indiana
- Iowa
- Kansas
- Kentucky
- Louisiana
- Maine
- Maryland
- Massachusetts
- Michigan
- Minnesota
- Mississippi
- Missouri

- Montana
- Nebraska
- Nevada
- New Hampshire
- New Jersey
- New Mexico
- New York
- North Carolina
- North Dakota
- Ohio
- Oklahoma
- Oregon
- Pennsylvania

- Rhode Island
- South Carolina
- South Dakota
- Tennessee
- Texas
- Utah
- Vermont
- Virginia
- Washington
- West Virginia
- Wisconsin
- Wyoming





Name _____

Period _____

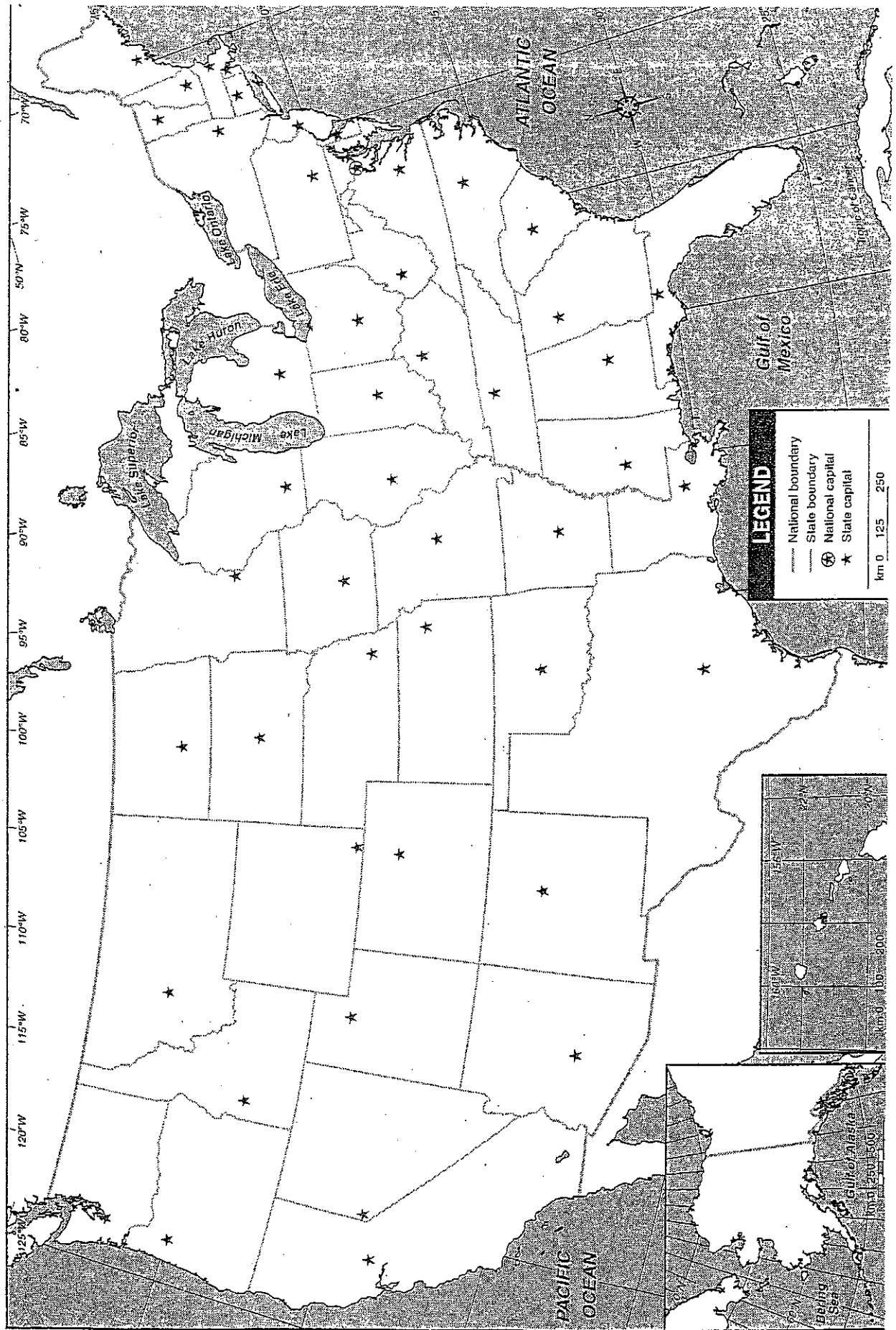
Political Map of the United States

Directions:

- 1) Write your name on the upper left hand corner of your map.
- 2) Use pages A-2 and A-3 of your textbook to neatly label each state and its capital city. You should make a small star to indicate each state capital.
- 3) The following cities are not state capitals, but they are significant to the development of the United States. Please find each city and label it, use a small dot to indicate its location.
 - New York City
 - Boston
 - Buffalo, N.Y.
 - Philadelphia
 - San Francisco
 - San Antonio
 - New Orleans
 - Chicago
- 4) Label the capital of our nation, Washington D.C. To label this, draw a small star with a circle around it.
- 5) After labeling everything on your map, color the states using six different colors.
- 6) Remember to do your *best* work, label and color neatly.

Period _____

Political Map: USA Capitals and States



Name _____

Physical Map of the United States

Directions:

Use pages A-4-A-5 of the textbook to label the following:

Rivers-

Mississippi River
Missouri River
Colorado River
Rio Grande
Ohio River
St. Lawrence River

Mountains-

Rocky Mountains
Sierra Nevada
Appalachian Mountains
Cascade Range
Alaska Range

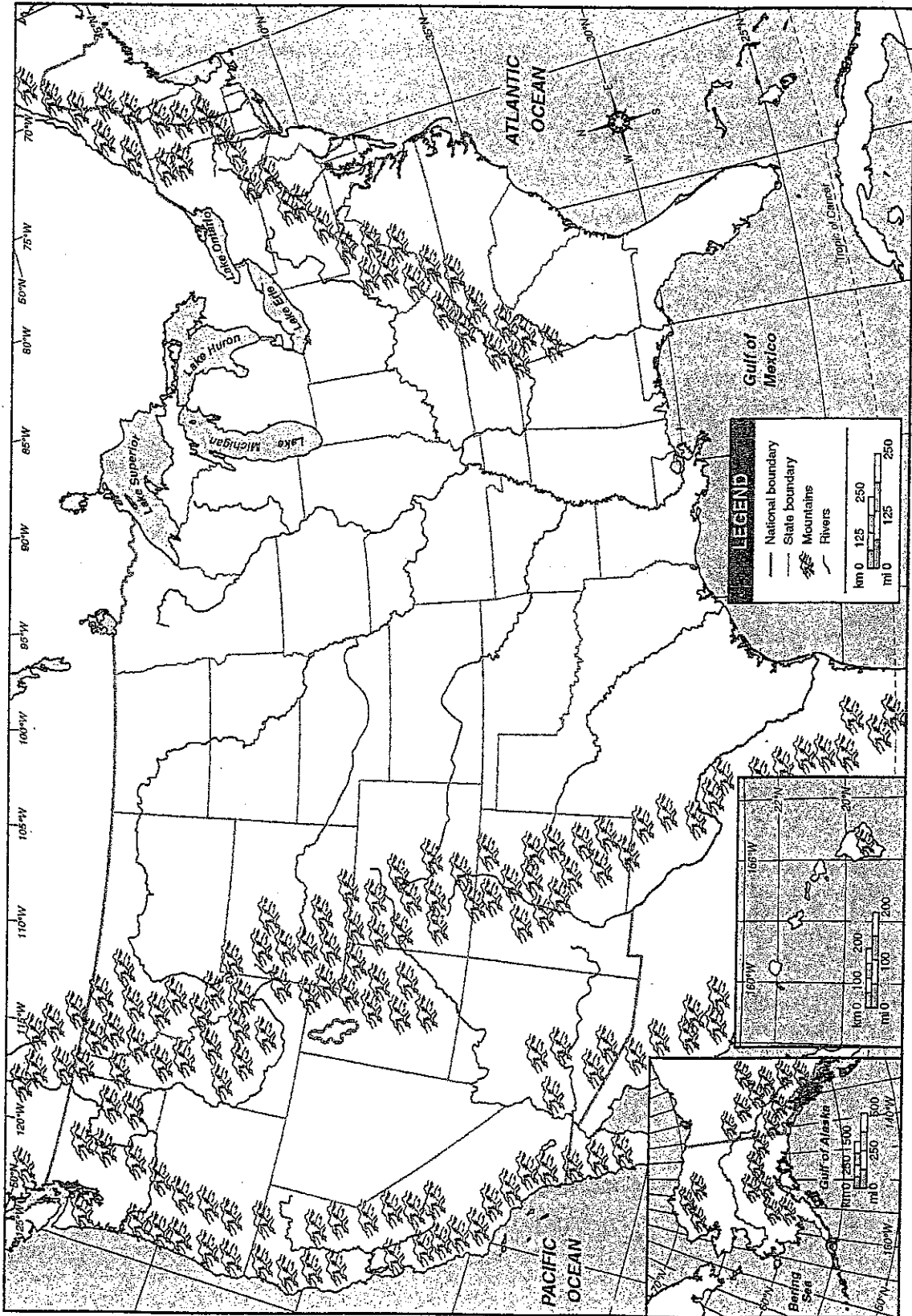
Color the following bodies of Water in BLUE

Atlantic Ocean
Pacific Ocean
Gulf of Mexico
All Five Great Lakes

Complete the following:

1. Trace all Rivers with a blue colored pencil
2. Shade Mountain regions in Brown
3. Create a map key at the bottom of your map indicating what each color represents.

USA: Physical



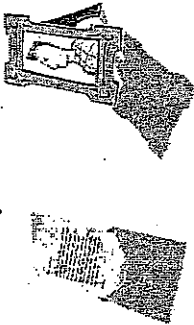
Name _____ Period _____


Physical Regions of the U.S.



Name _____

P. _____

<p>Primary Source</p> 	<p>Descriptions</p>	<p>Examples</p>
---	---------------------	-----------------

<p>Secondary Source TEXTBOOK</p> 	<p>Descriptions</p>	<p>Examples</p>
---	---------------------	-----------------



SCENARIO B

You are a principal who is trying to figure out the truth about a lunchroom fight. The fight was between Justin and Max. Justin is a new student. He is shy and doesn't have many friends. Max is a popular student who is known for his friendliness.

Account A: Justin

"Max started it. I was just standing in line waiting to pay for my food, and he shoved me super hard. And for no reason! He just freaked out on me. I don't even know the kid, and he's been weird to me ever since I started going to this school. Him and his friends glare at me in English class for no reason."

Account B: Max

"That kid is psycho. He turned around and punched me out of nowhere. Me and my friends were standing in line just joking around, and he turned around and punched me for no reason. He's messed up and creepy. Ask anyone."

Account C: Jamie (student who has class with Max and Justin right before lunch)

"I wasn't in the cafeteria today, and I'm not friends with any of those guys, but I've seen Max and his friends be mean to Justin in the hallways and in class when the teacher isn't looking. Not physical or anything, but they'll like say jokes under their breath and then laugh and stuff like that. They make him uncomfortable."

(3) What does each account say about who started the fight?

(a) Account A: _____

(b) Account B: _____

(c) Account C: _____

(4) Based on these three accounts, can you determine who started the fight? (Circle One.)

(a) Yes

(b) No

(5) Explain your answer to question #4 (above):



(6) What does each account say about how Max and his friends treat Justin?

(a) Account A: _____

(b) Account B: _____

(c) Account C: _____

(7) Based on these three accounts, can you determine how Max and his friends treat Justin?

(a) Yes

(b) No

(8) Explain your answer to question #7 (above):

(9) Why does Jamie's account (Account C) help you build a stronger case than if you just had Max's and Justin's accounts?

Name _____

Evaluating Sources

1. **Historical Question:** Who was present at the signing of the Declaration of Independence?

Source 1: Hollywood movie about the American Revolution made 2001.

Source 2: Book written by a famous historian who is an expert on the American Revolution, published in 1999.

Which do you trust more? Why?

2. **Historical Question:** What was slavery like in South Carolina?

Source 1: Interview with former slave in 1936. The interviewer is a black man collecting oral histories for the Federal Writers' Project.

Source 2: Interview with former slave in 1936. The interviewer is a white woman collecting oral histories for the Federal Writers' Project.

Which do you trust more? Why?

3. **Historical Question:** What was the layout of the Nazi concentration camp Auschwitz?

Source 1: Interview with 80 year-old Holocaust survivor in 1985.

Source 2: Map of concentration camp found in Nazi files.

Which do you trust more? Why?

4. **Historical Question:** Why were Japanese Americans put in internment camps during WWII?

Source 1: Government film explaining internment from 1942.

Source 2: Government report on Japanese Internment from 1983 based on declassified government documents.

Which do you trust more? Why?

5. **Historical Question:** Did American soldiers commit atrocities during the Vietnam War in 1969?

Source 1: Sworn testimony by American Sergeant in Congressional hearings in 1969.

Source 2: Speech by American General touring the United States in 1969.

Which do you trust more? Why?

6. **Historical Question:** What happened at the Battle of Little Bighorn?

Source 1: High school history textbook from 1985.

Source 2: Newspaper account from the day after the battle in June 1876.

Which do you trust more? Why?